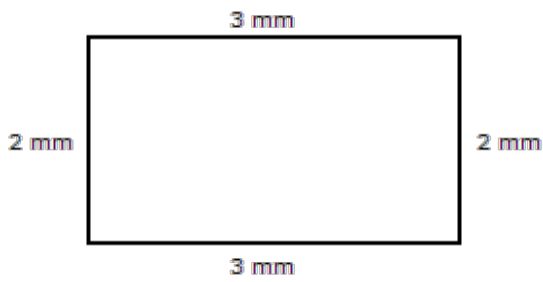
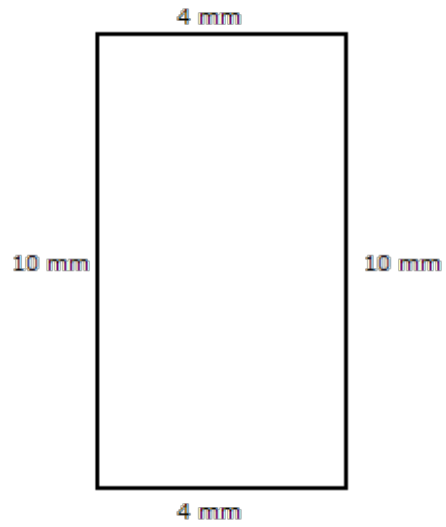


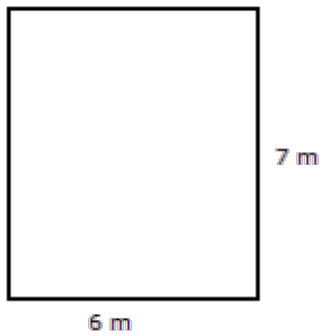
Calculate and write the *perimeter* for each of the shapes below. (Do not measure)



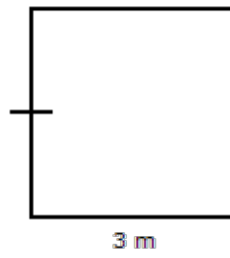
perimeter = _____ mm



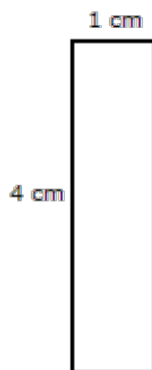
perimeter = _____ mm



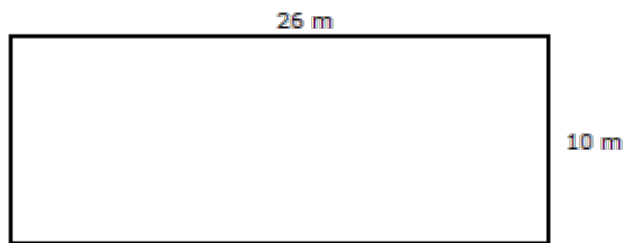
perimeter = _____ m



perimeter = _____ m



perimeter = _____ cm



perimeter = _____ cm



This work is licensed under a [Creative Commons Attribution-ShareAlike 2.5 Canada License](http://creativecommons.org/licenses/by-sa/2.5/ca/).